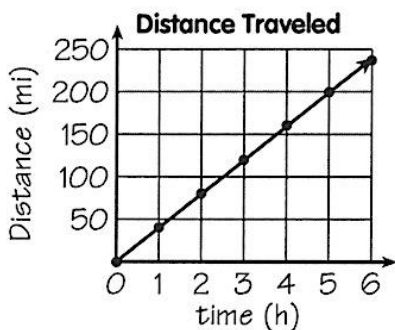
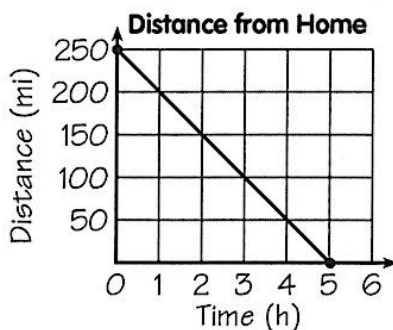


What Does It Take to Win a Tug of War?

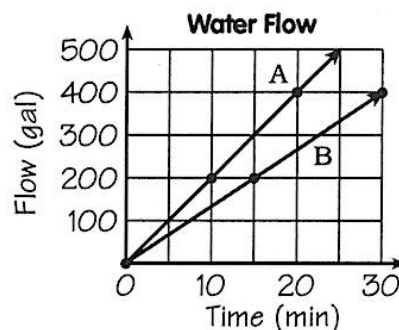
Find the rate of change represented by each line (some answers are rounded). Cross out the letters above each correct answer. Write the remaining letters in the spaces at the bottom of the page.



rate of change: _____

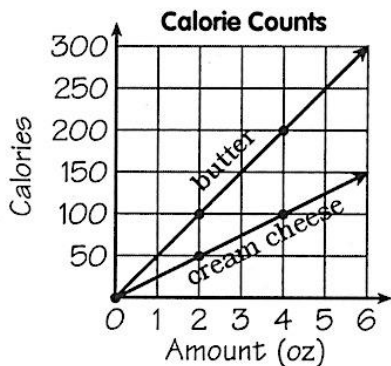


rate of change: _____



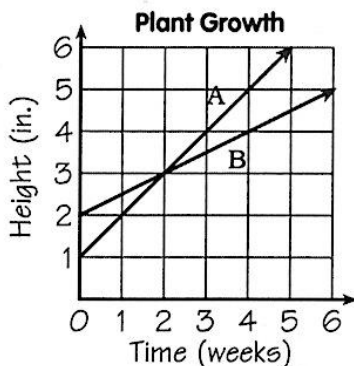
flow rate (A): _____

flow rate (B): _____



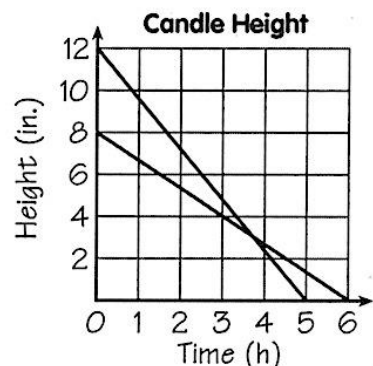
butter: _____

cream cheese: _____



plant A: _____

plant B: _____



12" candle: _____

8" candle: _____

