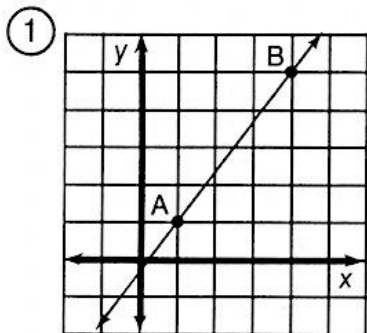
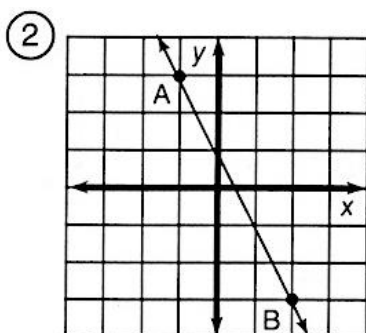


# What Do You Call a Duck That Steals?

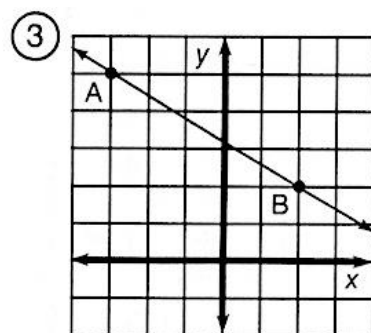
For each graph, find the slope of the line AB. Cross out each box in the rectangle at the bottom of page two that contains a correct answer. When you finish, print the remaining letters in the spaces to answer the riddle.



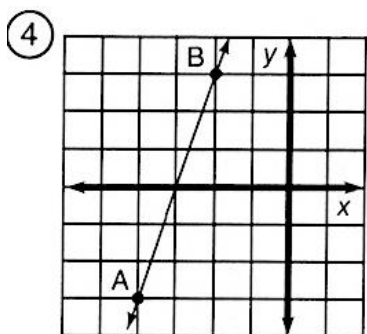
$$m = \frac{\Delta y}{\Delta x} =$$



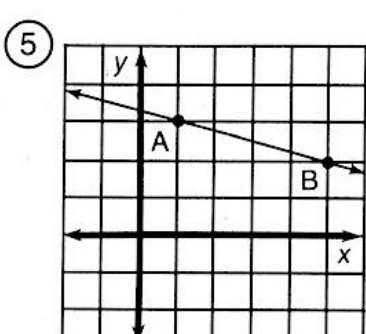
$$m = \frac{\Delta y}{\Delta x} =$$



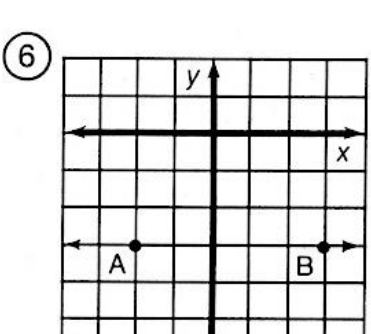
$$m = \frac{\Delta y}{\Delta x} =$$



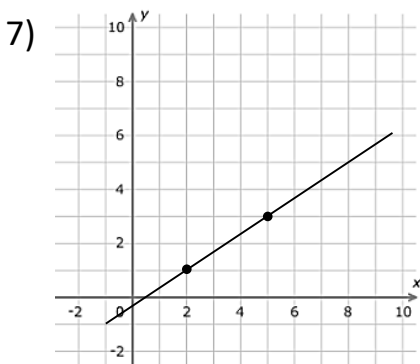
$$m = \frac{\Delta y}{\Delta x} =$$



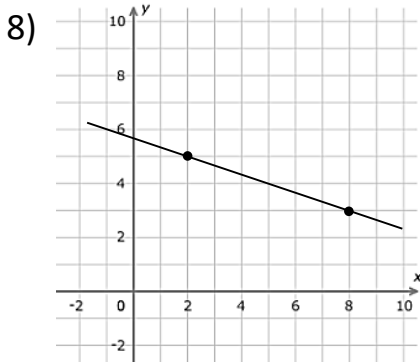
$$m = \frac{\Delta y}{\Delta x} =$$



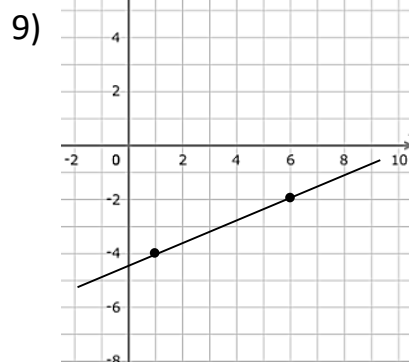
$$m = \frac{\Delta y}{\Delta x} =$$



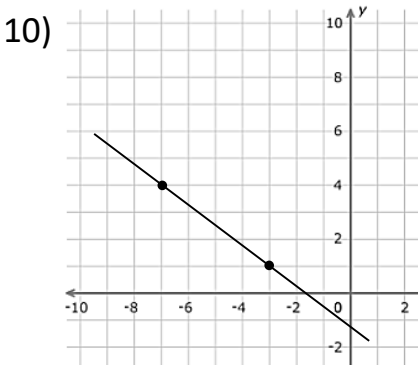
$$m = \frac{\Delta y}{\Delta x} =$$



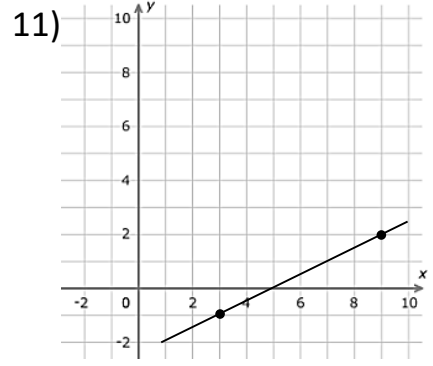
$$m = \frac{\Delta y}{\Delta x} =$$



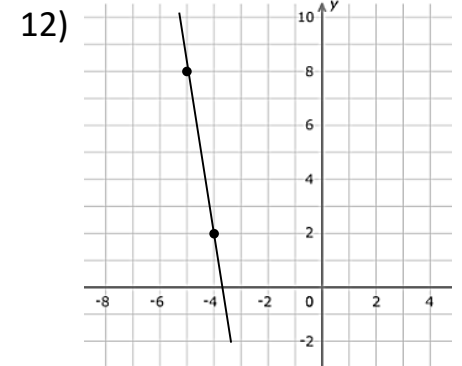
$$m = \frac{\Delta y}{\Delta x} =$$



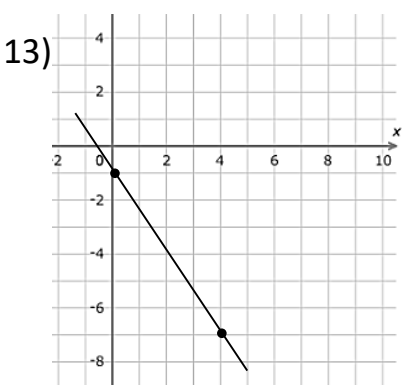
$$m = \frac{\Delta y}{\Delta x} =$$



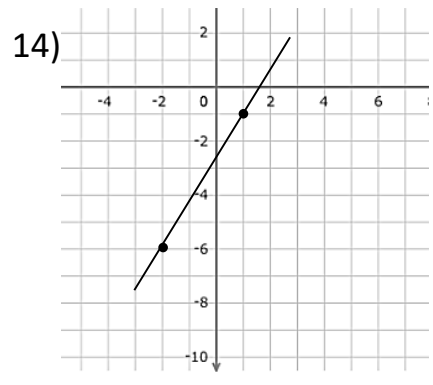
$$m = \frac{\Delta y}{\Delta x} =$$



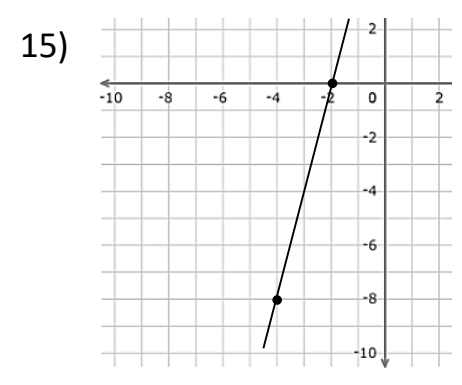
$$m = \frac{\Delta y}{\Delta x} =$$



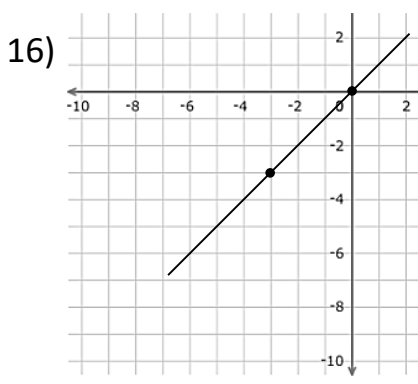
$$m = \frac{\Delta y}{\Delta x} =$$



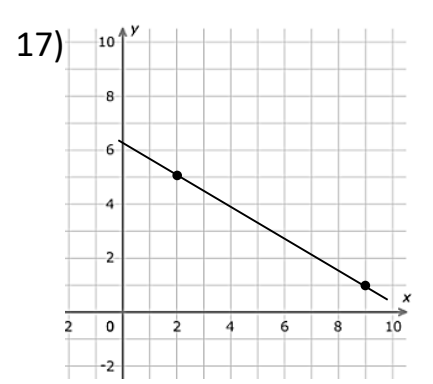
$$m = \frac{\Delta y}{\Delta x} =$$



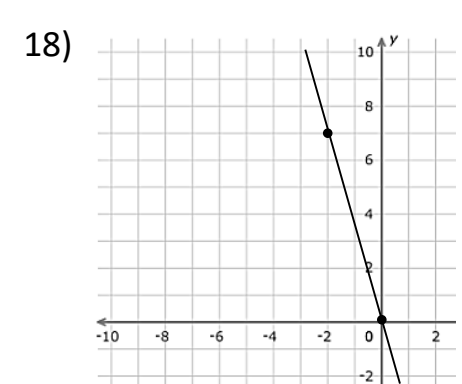
$$m = \frac{\Delta y}{\Delta x} =$$



$$m = \frac{\Delta y}{\Delta x} =$$



$$m = \frac{\Delta y}{\Delta x} =$$



$$m = \frac{\Delta y}{\Delta x} =$$

DU	AB	CK	ST	AR	IG	AT	OB	IG	ET	BE	ST
0	-6	$-\frac{3}{5}$	$-\frac{4}{7}$	9	$\frac{1}{2}$	$-\frac{7}{2}$	$-\frac{7}{6}$	$\frac{4}{3}$	$\frac{2}{3}$	$-\frac{5}{4}$	$\frac{5}{3}$
CA	RD	RI	CH	UC	RI	ME	AQ	UA	KY	ET	CK
$\frac{2}{5}$	$\frac{1}{6}$	$-\frac{1}{4}$	-2	-8	$-\frac{3}{2}$	1	$-\frac{1}{3}$	$-\frac{3}{4}$	$\frac{8}{5}$	4	3