




**Math**

Numbers and quantities from 1 to 5.

**Instructions:** Count the quantities within the dominos. Match the quantities to the numbers on the right. To do this, connect them by tracing a line between the two.

**Greenwood 2020**



3

4

5

1

2