













Prénom : _____

1. Compte le nombre d'objets dans chacun des ensembles. Compare les ensembles en utilisant les symboles $<$, $>$ et $=$.

<div data-bbox="191 436 305 583" style="border: 1px solid black; width: 60px; height: 60px; display: flex; align-items: center; justify-content: center;"> </div>	<div data-bbox="332 409 750 619"></div>	<div data-bbox="766 451 880 556" style="border: 1px solid black; border-radius: 50%; width: 60px; height: 60px; display: flex; align-items: center; justify-content: center;"> </div>	<div data-bbox="906 409 1323 619"></div>	<div data-bbox="1339 436 1453 583" style="border: 1px solid black; width: 60px; height: 60px; display: flex; align-items: center; justify-content: center;"> </div>
<div data-bbox="191 678 305 825" style="border: 1px solid black; width: 60px; height: 60px; display: flex; align-items: center; justify-content: center;"> </div>	<div data-bbox="332 651 750 861"></div>	<div data-bbox="766 693 880 798" style="border: 1px solid black; border-radius: 50%; width: 60px; height: 60px; display: flex; align-items: center; justify-content: center;"> </div>	<div data-bbox="906 651 1323 861"></div>	<div data-bbox="1339 678 1453 825" style="border: 1px solid black; width: 60px; height: 60px; display: flex; align-items: center; justify-content: center;"> </div>
<div data-bbox="191 934 305 1081" style="border: 1px solid black; width: 60px; height: 60px; display: flex; align-items: center; justify-content: center;"> </div>	<div data-bbox="332 903 750 1113"></div>	<div data-bbox="766 945 880 1050" style="border: 1px solid black; border-radius: 50%; width: 60px; height: 60px; display: flex; align-items: center; justify-content: center;"> </div>	<div data-bbox="906 903 1323 1113"></div>	<div data-bbox="1339 934 1453 1081" style="border: 1px solid black; width: 60px; height: 60px; display: flex; align-items: center; justify-content: center;"> </div>
<div data-bbox="191 1176 305 1323" style="border: 1px solid black; width: 60px; height: 60px; display: flex; align-items: center; justify-content: center;"> </div>	<div data-bbox="332 1144 750 1354"></div>	<div data-bbox="766 1186 880 1291" style="border: 1px solid black; border-radius: 50%; width: 60px; height: 60px; display: flex; align-items: center; justify-content: center;"> </div>	<div data-bbox="906 1144 1323 1354"></div>	<div data-bbox="1339 1176 1453 1323" style="border: 1px solid black; width: 60px; height: 60px; display: flex; align-items: center; justify-content: center;"> </div>
<div data-bbox="191 1428 305 1575" style="border: 1px solid black; width: 60px; height: 60px; display: flex; align-items: center; justify-content: center;"> </div>	<div data-bbox="332 1396 750 1606"></div>	<div data-bbox="766 1438 880 1543" style="border: 1px solid black; border-radius: 50%; width: 60px; height: 60px; display: flex; align-items: center; justify-content: center;"> </div>	<div data-bbox="906 1396 1323 1606"></div>	<div data-bbox="1339 1428 1453 1575" style="border: 1px solid black; width: 60px; height: 60px; display: flex; align-items: center; justify-content: center;"> </div>
<div data-bbox="191 1680 305 1827" style="border: 1px solid black; width: 60px; height: 60px; display: flex; align-items: center; justify-content: center;"> </div>	<div data-bbox="332 1648 750 1858"></div>	<div data-bbox="766 1690 880 1795" style="border: 1px solid black; border-radius: 50%; width: 60px; height: 60px; display: flex; align-items: center; justify-content: center;"> </div>	<div data-bbox="906 1648 1323 1858"></div>	<div data-bbox="1339 1680 1453 1827" style="border: 1px solid black; width: 60px; height: 60px; display: flex; align-items: center; justify-content: center;"> </div>