




Geometry - Constructions using the compass

Please print this sheet and work along with the class as we conquer the following.

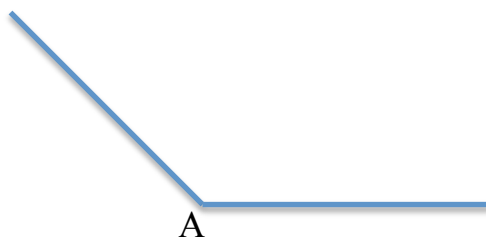
Please copy segment AB:



Please bisect segment PQ in two different ways:



Please copy angle A:



Please construct a line parallel to AB through point Q.

Q
•

